

SHAPE YOUR THOUGHTS COMPETITION



Fill the form with the answers you recorded in your notebook and send it to info@eduka3D.com

**TOP 3
ENTRIES WILL
WIN EXCITING
PRIZES!**

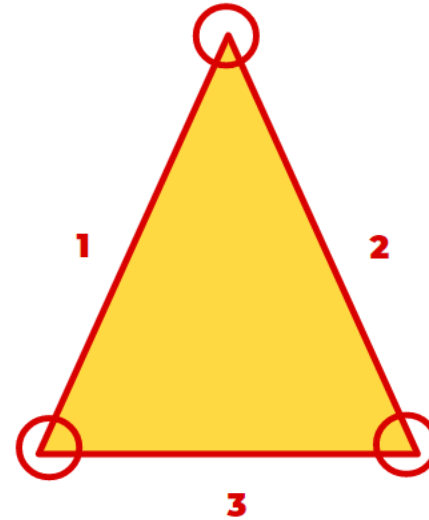


This shape is called a triangle.

A triangle is a closed shape that has three sides and three corners.

We say this is a definition of a triangle.


A definition is a complete description with the least of words.



SHARE
YOUR
THOUGHTS
WITH US

Can you give a definition to a triangle in your own words?

1





Chessboard



Clock



Dice



2




SHARE
YOUR
THOUGHTS
WITH US

Can you think of more objects with a square shape? Write down three in your notebook.

Large cloud-shaped writing area with three horizontal lines for text.

Can you draw any of them?



3



**SHARE
YOUR
THOUGHTS
WITH US**

1. Which among the four shapes you learnt is the most used around you?
 2. Can you say ... Why ?
- Please add this answer in your notebook.





This is a trapezoid. A trapezoid is a quadrilateral, or a four-sided figure.

It has two unequal parallel sides.

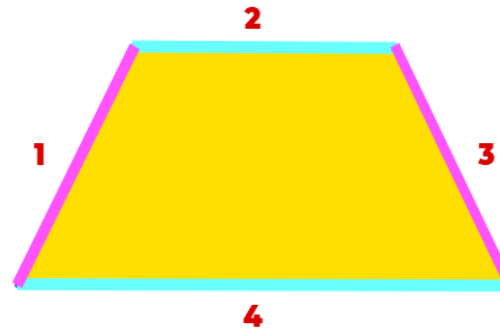
4



SHARE
YOUR
THOUGHTS
WITH US

Could you define (describe) a trapezoid in your words? Write the definition in your notebook.

TRY TO BE FUNNY





Do you know what is the shape of this plate?

It has an oval shape. An oval is a squeezed circle.



5



SHARE
YOUR
THOUGHTS
WITH US

Think of another difference between
a circle and an oval.

TRY TO BE CREATIVE



Finally, you must use all the remaining spheres to make two polygons!

6



SHARE
YOUR
THOUGHTS
WITH US

Write down names of the two polygons
that you made in your notebook.

**7**

**SHARE
YOUR
THOUGHTS
WITH US**

After you finished your final project
can you share with us a print-screen
picture from of your design



SHAPE YOUR THOUGHTS COMPETITION



Fill the form with the answers you recorded in your notebook and send it to info@eduka3D.com

**TOP 3
ENTRIES WILL
WIN EXCITING
PRIZES!**